
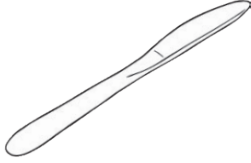







Is It Magnetic?

In the prediction column below write whether you think each object will be attracted to a magnet or not. Test the objects with a magnet and fill in the results column.

| Object | Prediction | Test Result |
|------------------------------------------------------------------------------------------------------|------------|-------------|
| fork  | | |
| knife  | | |
| spoon  | | |
| 'copper' coin  | | |
| 'silver' coin  | | |
| pencil  | | |
| drink can  | | |

Is It Magnetic?

In the prediction column below write whether you think each object will be attracted to a magnet or not. Test the objects with a magnet and fill in the results column.

| Object | Prediction | Test Result |
|--------|------------|-------------|
| | | |
| | | |
| | | |
| | | |
| | | |
| | | |
| | | |